

Terms of Use



Copyright © Lianna K. Avakyan

Except for the one classroom use by the original purchaser, this printout may not be duplicated or copied. Please purchase a separate copy for every recipient if you wish to share the information in this activity with them. Otherwise, please direct them to www.edukids.com or <https://www.teacherspayteachers.com/Store/Lianna-Avakyan> where this activity and other titles are available for purchase or as a Freebie. Creating these resources takes me many hours. This product's components may not be copied in any way, and doing so would be against the Digital Millennium Copyright Act. Placing this product online in ANY manner would also be prohibited (DMCA). Google will locate these items and follow the trail back to the publishing website.

Thank you so much for your cooperation and understanding.

Check out the activities listed below.

Sentence Scramble Activities



sun The shining. is





game. are playing The a children

Your students can practice building CVC words using short vowel sounds (one box per sound, not necessarily per letter).

Elkonin Boxes

--	--	--	--	--

Tom and Dad

 Tom  pit

Dad is sad. Dad did not fit in the pit.
Tom is not sad. Tom can fit in the pit.
Dad is mad. Dad did not sit in the pit.
Tom is not mad. Tom can sit in the pit.

Illustrate the story here:

Writing goals

- uppercase.
- words.
- Stretch out a word and write that I hear.
- Write events in order.
- Use commas in my sentences when I list 3 or more items and when someone or something.
- End my sentences with a punctuation mark.
- Use quotation marks to show that someone is speaking.
- Reread and edit my writing to make sure it makes sense.
- Add details to my drawing.

KINDERGARTEN WRITING

Writing Good and Sad news.

Good News

Sad News!


FREEBIE

Edukidss.com

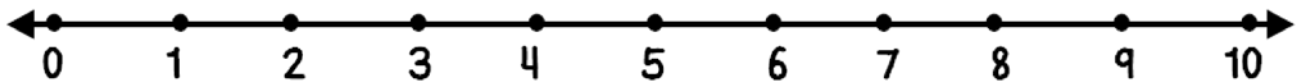
Marta has 5 balloons and Peter has 3 balloons.

How many balloons do they have together?

Use the balloons to solve the problem




Use the number line to solve the problem




Write the number sentence to solve the problem

$$\underline{\quad} + \underline{\quad} =$$

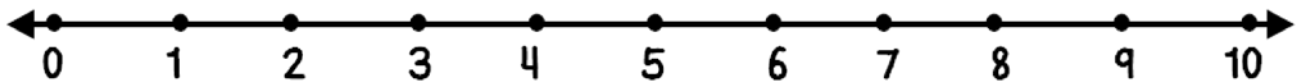


There were 2 birds on the branch, then 2 more birds landed on the branch. How many birds are on the branch?

Use the birds to solve the problem




Use the number line to solve the problem




Write the number sentence to solve the problem

$$\underline{\quad} + \underline{\quad} =$$

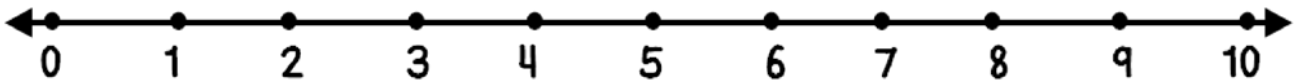


There were 6 frogs at the pond, then 2 frogs hopped away. How many frogs are left at the pond?

Use the frogs to solve the problem




Use the number line to solve the problem



Write the number sentence to solve the problem

$$\underline{\quad} - \underline{\quad} =$$




Sue grew 8 flowers. 6 of her flowers were red and the rest were yellow. How many flowers were yellow?

Use the flowers to solve the problem



Use the ten frame to solve the problem and then write the number sentence

$$\underline{\quad} + \underline{\quad} =$$

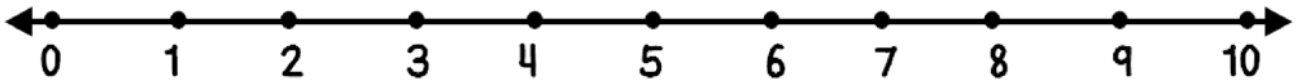


Write your own puzzle

Use the _____ to solve the problem



Use the number line to solve the problem



Write the number sentence to solve the problem

$$\underline{\hspace{2cm}} \quad \underline{\hspace{2cm}} =$$
